

Name:

AP Chemistry - Summer Packet

Teacher: **Dr. Moore** dmoore@rutherfordschools.org

Directions:

Please complete the following packet before the first day of class in September.

This packet will be collected and graded, and the material will be covered on the first test.

The first test of the year will be within the first 2 weeks of school.

This summer packet is split into 2 sections: Part 1: Memorization/Content Review & Part 2: Review Problems

Part 1: Memorization/Content Review: *You are to memorize/review the following topics:*

- ⇒ Common ions and Polyatomic ions
- ⇒ Rules for naming covalent compounds
- ⇒ Rules for naming ionic compounds
- ⇒ Rules for naming acids
- ⇒ Rules for determining oxidation numbers
- ⇒ Solubility rules

Part 2: Review Problems: *A series of worksheets on the following topics:*

Worksheet #1: Significant Figures and Dimensional Analysis

Worksheet #2: Structure of the Atom and the Periodic Table

Worksheet #3: Naming Inorganic Compounds

Worksheet #4: Writing Equations for Chemical Reactions

Worksheet #5: The Mole

Worksheet #6: Empirical and Molecular Formulas

Worksheet #7: Stoichiometry Problems

Worksheet #8: Limiting Reactants and Theoretical Yield

Worksheet #9: Molarity

Worksheet #10: Solubility Rules

Have a great summer, and I'll see you in September!

PERIODIC TABLE OF THE ELEMENTS

1																		2		18																	
1 H 1.008																		2 He 4.00																			
3 Li 6.94	4 Be 9.01																	5 B 10.81	6 C 12.01	7 N 14.01	8 O 16.00	9 F 19.00	10 Ne 20.18														
11 Na 22.99	12 Mg 24.30																	13 Al 26.98	14 Si 28.09	15 P 30.97	16 S 32.06	17 Cl 35.45	18 Ar 39.95														
		3	4	5	6	7	8	9	10	11	12							13	14	15	16	17	18														
19 K 39.10	20 Ca 40.08	21 Sc 44.96	22 Ti 47.87	23 V 50.94	24 Cr 52.00	25 Mn 54.94	26 Fe 55.85	27 Co 58.93	28 Ni 58.69	29 Cu 63.55	30 Zn 65.38	31 Ga 69.72	32 Ge 72.63	33 As 74.92	34 Se 78.97	35 Br 79.90	36 Kr 83.80																				
37 Rb 85.47	38 Sr 87.62	39 Y 88.91	40 Zr 91.22	41 Nb 92.91	42 Mo 95.95	43 Tc	44 Ru 101.07	45 Rh 102.91	46 Pd 106.42	47 Ag 107.87	48 Cd 112.41	49 In 114.82	50 Sn 118.71	51 Sb 121.76	52 Te 127.60	53 I 126.90	54 Xe 131.29																				
55 Cs 132.91	56 Ba 137.33	57-71 *	72 Hf 178.49	73 Ta 180.95	74 W 183.84	75 Re 186.21	76 Os 190.23	77 Ir 192.22	78 Pt 195.08	79 Au 196.97	80 Hg 200.59	81 Tl 204.38	82 Pb 207.2	83 Bi 208.98	84 Po	85 At	86 Rn																				
87 Fr	88 Ra	89-103 †	104 Rf	105 Db	106 Sg	107 Bh	108 Hs	109 Mt	110 Ds	111 Rg	112 Cn	113 Nh	114 Fl	115 Mc	116 Lv	117 Ts	118 Og																				
																		*Lanthanoids																			
57 La	58 Ce	59 Pr	60 Nd	61 Pm	62 Sm	63 Eu	64 Gd	65 Tb	66 Dy	67 Ho	68 Er	69 Tm	70 Yb	71 Lu																							
89	90	91	92	93	94	95	96	97	98	99	100	101	102	103																							
																		†Actinoids																			
232.04	231.04	238.03	Ac	Th	Pa	U	Np	Pu	Am	Cm	Bk	Cf	Es	Fm	Md	No	Lr																				

Part1: Memorization/Content Review

Polyatomic Ion List:

Make flashcards, take the lists with you on vacation, or do whatever it takes to get this information firmly planted.

-1	-2	-3
<i>Acetate</i> CH_3COO^- <i>Hydroxide</i> OH^- <i>Bicarbonate</i> HCO_3^- <i>Nitrite</i> NO_2^- <i>Nitrate</i> NO_3^- <i>Chlorite</i> ClO_2^- <i>Chlorate</i> ClO_3^- <i>Perchlorate</i> ClO_4^- <i>Cyanide</i> CN^- <i>Thiocyanate</i> SCN^- <i>Hypochlorite</i> OCl^- <i>Iodate</i> IO_3^- <i>Permanganate</i> MnO_4^-	<i>Carbonate</i> CO_3^{2-} <i>Peroxide</i> O_2^{2-} <i>Sulfite</i> SO_3^{2-} <i>Sulfate</i> SO_4^{2-} <i>Chromate</i> CrO_4^{2-} <i>Dichromate</i> $\text{Cr}_2\text{O}_7^{2-}$ <i>Oxalate</i> $\text{C}_2\text{O}_4^{2-}$ <i>Silicate</i> SiO_3^{2-} <i>Thiosulfate</i> $\text{S}_2\text{O}_3^{2-}$	<i>Phosphite</i> PO_3^{3-} <i>Phosphate</i> PO_4^{3-} <i>Arsenide</i> As^{3-}
		+1
		<i>Ammonium</i> NH_4^+

Rules for Naming Covalent Compounds:

⇒ For a diatomic molecule (1 element only): Br_2 , I_2 , N_2 , Cl_2 , H_2 , O_2 , F_2

These simply become "gases," meaning: Bromine gas, Iodine gas...etc.

⇒ For a Covalent Binary (Nonmetal / Nonmetal) use the list of prefixes to the right →

1. Name the first element by adding the appropriate prefixes EXCEPT "mono-"
2. Name the second prefixes (including mono)
3. Change the ending of the second element to "-ide"

Examples:

P_2O_5 = diphosphorous pentoxide

C_2Cl_4 = dicarbon tetrachloride

# of elements	Prefix
1	mono-
2	di-
3	tri-
4	tetra-
5	penta-
6	hexa-
7	hepta-
8	octa-
9	nona-
10	deca-

Rules for Naming Covalent Compounds:

Examples: NaCl = sodium chloride, BaF₂ = barium fluoride, CuO = copper (II) oxide

1. The full name of the cation is listed first. (A cation is a positive ion).
2. The root of the anion name is listed second and is followed by the suffix "ide." (An anion is a negative ion).
3. If the compound contains a transition metal, a Roman numeral is included after the cation name to indicate the oxidation number of the metal.
4. Remember that the cation(s) and anion(s) combine in the simplest ratio that balances the charge. That is, the sum of the charge must be equal to zero in the compound formed.

Rules for Naming Ionic Compounds Containing Polyatomic Ions

Examples: CaCO₃ = calcium carbonate, Fe(OH)₃ = iron (III) hydroxide, (NH₄)₂SO₄ = ammonium sulfate

1. The full name of the cation is listed first.
2. The full name of the anion is listed second.
3. Use the table below for common polyatomic ions
4. Remember that the cation(s) and anion(s) combine in the simplest ratio that balances the charge. That is, the sum of the charge must be equal to zero in the compound formed.
5. Finally, use parentheses when the simplest ratio requires more than one polyatomic ion in the compound formula.

Rules for Naming Acids

⇒ H + element:

Hydro + the root of the element + -ic acid

Examples: HI = hydroiodic acid, HBr = hydrobromic acid

⇒ H + Polyatomic Ion

Root of the polyatomic ion name + appropriate ending

- Polyatomic ion ends in -ate, change the ending to -ic acid.
- Polyatomic ion ends in -ite, change the ending to -ous acid.

Examples: H₂SO₄ = sulfuric acid, HNO₂ = nitrous acid

Rules for Determining Oxidation Numbers (aka Oxidation States):

1. The oxidation number of any uncombined element is zero.
2. The oxidation number of a monatomic ion equal the charge on the ion.
3. The more electronegative element in a binary compound is assigned the number equal to the charge it would have if it were an ion.
4. The oxidation number of fluorine in a compound is always -1 .
5. Oxygen has an oxidation number of -2 unless it is combined with F, when it is $+2$, or it is in a peroxide, when it is -1 .
6. The oxidation state of hydrogen in most of its compounds is $+1$, unless it combined with a metal, in which case it is -1 .
7. In compounds, the elements of groups 1 and 2 as well as aluminum have oxidation number of $+1$, $+2$, and $+3$, respectively.
8. The sum of the oxidation numbers of all atoms in a neutral compound is zero.
9. The sum of the oxidation number of all atoms in a polyatomic ion equals the charge of the ion.

Solubility Rules

1. Salts containing Group I elements are soluble (Li^+ , Na^+ , K^+ , Cs^+ , Rb^+).
Exceptions to this rule are rare. Salts containing the ammonium ion (NH_4^+) are also soluble.
2. Salts containing nitrate ion (NO_3^-) are generally soluble.
3. Salts containing Cl^- , Br^- , I^- are generally soluble. Important exceptions to this rule are halide salts of Ag^+ , Pb^{2+} , and $(\text{Hg}_2)^{2+}$. Thus, AgCl , PbBr_2 , and Hg_2Cl_2 are all insoluble.
4. Most silver salts are insoluble. AgNO_3 and $\text{Ag}(\text{C}_2\text{H}_3\text{O}_2)$ are common soluble salts of silver; virtually anything else is insoluble.
5. Most sulfate salts are soluble. Important exceptions to this rule include BaSO_4 , PbSO_4 , Ag_2SO_4 and SrSO_4 .
6. Most hydroxide salts are only slightly soluble. Hydroxide salts of Group I elements are soluble.
7. Most sulfides of transition metals are highly insoluble. Thus, CdS , FeS , ZnS , Ag_2S are all insoluble.
Arsenic, antimony, bismuth, and lead sulfides are also insoluble.
8. Carbonates, Chromates, Phosphates and Fluorides are frequently insoluble (unless with a Group 1 metal).

Worksheet #1: Significant Figures & Dimensional Analysis

Directions: For each problem below, write the equation and show your work. Be sure to box your final answer.

Part 1: Solve the following problems using scientific notation and rounding to the appropriate value.

- a. 300.235800 _____ c. 0.000957830 _____
b. 456,500 _____ d. -0.035000 _____

Part 2: Solve the following problems, and show your final answer with the appropriate number of significant figures.

- a. $1.24056 + 75.80$ _____ d. $45.0 \times 9.0 + 89.22 / 75$ _____
b. $(8 + 9) / (34.0 - 20.)$ _____ e. $(2.88 + .5) \times (23,000 - 0.11)$ _____
c. $0.8897 \times 2.15 + 0.002 / .1$ _____

Part 3: For each problem below, show your work. Always use units and box in your final answer.

- a. The density of pure silver is 10.5 g/cm^3 at 20°C . If 5.25 g of pure silver pellets are added to a graduated cylinder containing 11.2 mL of water, to what volume level will the water in the cylinder rise?
- b. An aluminum block has a density of 2.70 g/mL . If the mass of the block is 24.60 g, find the volume of the substance.

Part 4: Convert the following measurements to the desired unit:

- a. $0.050 \text{ cm} =$ _____ mm b. $1872 \text{ mg} =$ _____ kg
c. $1.9 \text{ dL} =$ _____ cL d. $3.4 \times 10^{-3} \text{ ks} =$ _____ cs

Worksheet #2: Structure of the Atom & The Periodic Table

1. What were the main points of Dalton's Atomic Theory? Which of these points are still accepted today?

Which ones do we no longer accept, and why?

2. Summarize the evidence used by J.J. Thomson to argue that cathode rays consist of negatively charged particles.

3. Let's pretend you are holding two atoms of carbon that are isotopes.

Describe what the two atoms have in common and how they are different.

4. Fill in the gaps in the table, assuming each column represents a neutral atom.

Symbol	K				
# Protons		25			82
# Neutrons		30	64		
# Electrons			48	56	
Mass #				137	207

5. Write the correct symbol, with both superscripts and subscripts, for each of the following:
- a. the isotope of sodium with mass 23 _____
 - b. the atom of vanadium that contains 28 neutrons _____
 - c. the isotope of chlorine with mass 37 _____
 - d. an atom of magnesium that has an equal number of protons and neutrons _____
6. Give the name and the common charge for elements found in each of these groups of the Periodic Table:
- a. Group 1 _____
 - b. Group 2 _____
 - c. Group 17 _____
 - d. Group 18 _____
7. Describe where each type of element is found on the Periodic Table:
- a. metals _____
 - b. nonmetals _____
 - c. transition metals _____
 - d. lanthanides _____
 - e. actinides _____

Worksheet #3: Naming Inorganic Compounds

1. Give the name for each of the following ionic compounds:

- a. AlF_3 _____
- b. $\text{Fe}(\text{OH})_2$ _____
- c. $\text{Cu}(\text{NO}_3)_2$ _____
- d. $\text{Ba}(\text{ClO}_4)_2$ _____
- e. Li_3PO_4 _____
- f. Hg_2S _____
- g. $\text{Ca}(\text{C}_2\text{H}_3\text{O}_2)_2$ _____
- h. $\text{Cr}_2(\text{CO}_3)_3$ _____
- i. K_2CrO_4 _____
- j. $(\text{NH}_4)_2\text{SO}_4$ _____

2. Write the chemical formula for each of the following compounds:

- a. copper (I) oxide _____
- b. potassium peroxide _____
- c. aluminum hydroxide _____
- d. zinc nitrate _____
- e. mercury (I) bromide _____
- f. iron (III) carbonate _____
- g. sodium hypobromite _____

3. Give the name or chemical formula, as appropriate, for each of the following acids:

- a. HBrO_3 _____
- b. HBr _____
- c. H_3PO_4 _____
- d. hypochlorous acid _____
- e. iodic acid _____
- f. sulfurous acid _____

4. Give the name or chemical formula, as appropriate, for each of the following molecular substances:

- a. SF_6 _____
- b. IF_5 _____
- c. XeO_3 _____
- d. dinitrogen tetroxide _____
- e. hydrogen cyanide _____
- f. tetraphosphorous hexasulfide _____

Worksheet #4: Writing Chemical Equations

Directions:

- ⇒ For each equation below, identify the type (synthesis, decomposition, single replacement, double replacement, or combustion), predict the products, and then write the **balanced** equation for the reaction.
- ⇒ Remember to use the solubility rules for double replacement reactions and the activity series for single replacement reactions. *Hint: when writing these reactions, ignore all of the information about heat, or bubbling, or mixing. These are just excess words used to make complete sentences. Simply pull out the chemical formulas.

For example:

Solutions of silver nitrate and magnesium iodide are combined.

Answer: This is a double displacement reaction. $2\text{AgNO}_3 + \text{MgI}_2 \rightarrow 2\text{AgI} + \text{Mg}(\text{NO}_3)_2$

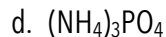
1. Ammonium sulfate reacts with barium nitrate.
2. Zinc metal is added to a solution of copper (II) chloride.
3. Propane gas (C_3H_8) is burned in excess oxygen.
4. Perchloric acid reacts with cadmium to form cadmium perchlorate and a gas.
5. Magnesium and nitrogen gas are heated together.
6. Chlorine gas is bubbled through a solution of sodium bromide.

7. Solutions of lead nitrate and calcium iodide are combined.
8. Sulfuric acid is combined with sodium hydroxide.
9. Isopropyl alcohol (C_3H_7OH) is burned in oxygen.
10. Iron metal shavings are added to hydrochloric acid.
11. Solid sodium carbonate is heated in a crucible.
12. Sodium metal is added to distilled water.
13. Zinc carbonate can be heated to form zinc oxide and carbon dioxide
14. Hydrofluoric acid and silicon dioxide react to form silicon tetrafluoride and water.
15. Sulfur dioxide reacts with water to form sulfurous acid.
16. A solution of sodium bromide reacts with a solution of vanadium (III) nitrate to form a brightly colored precipitate.

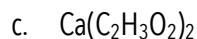
Worksheet #5: The Mole

Directions: For each problem below, show your work. Always use units and be sure to box your final answer.

1. Determine the molar mass of each of the following compounds:



e. copper (II) sulfate



f. disilicon hexabromide

2. The molecular formula of aspartame, the artificial sweetener marketed as NutraSweet, is $\text{C}_{14}\text{H}_{18}\text{N}_2\text{O}_5$.

a. What is the molar mass of aspartame?

b. How many moles of aspartame are present in 1.00 mg of aspartame? (1000 mg = 1g)

c. How many molecules of aspartame are present in 1.00 mg of aspartame?

d. How many hydrogen atoms are present in 1.00 mg of aspartame?

3. A sample of glucose, $\text{C}_6\text{H}_{12}\text{O}_6$, contains 2.03×10^{21} atoms of carbon.

a. How many atoms of hydrogen does it contain?

b. How many molecules of glucose does it contain?

c. How many moles of glucose does it contain?

d. What is the mass of the sample in grams?

4. Calculate the following amounts:
- How many moles of chloride ions are in 0.0750 g of magnesium chloride?
 - What is the mass, in grams, of 3.50×10^{-3} mol of aluminum sulfate?
 - What is the mass, in grams, of 1.75×10^{20} molecules of caffeine, $C_8H_{10}N_4O_2$?
 - What is the molar mass of cholesterol if 0.00105 mol weigh 0.406 g?
5. Calculate the number of molecules in:
- 0.0666 mol propane, C_3H_8 , a hydrocarbon fuel
 - A 50.0 mg tablet of acetaminophen, $C_8H_9O_2N$, an analgesic solid under the name of Tylenol.
 - A tablespoon of table sugar, $C_{12}H_{22}O_{11}$, weighing 10.5 g
6. The allowable concentration level of vinyl chloride, C_2H_3Cl , in the atmosphere in a chemical plant is 2.0×10^{-6} g/L.
- How many moles of vinyl chloride in each liter does this represent?
 - How many molecules per liter is this?

Worksheet #6: Empirical & Molecular Formulas

Directions: For each problem below, show your work. Always use units and be sure to box your final answer.

1. Determine the empirical formula of each of the following compounds if a sample contains
 - a. 0.104 mol K, 0.052 mol C, and 0.156 mol O

 - b. 5.28g Sn and 3.37g F

 - c. 87.5 percent N and 12.5 percent H by mass

2. Determine the empirical formulas of the compounds with the following compositions by mass
 - a. 10.4% C, 27.8% S, and 61.7% Cl

 - b. 21.7% C, 9.6% O, and 68.7% F

3. What is the molecular formula of each of the following compounds?
 - a. empirical formula CH_2 , molar mass = 84 g/mol

 - b. empirical formula NH_2Cl , molar mass = 51.5 g/mol

4. Determine the empirical and molecular formulas of each of the following substances:
 - a. Ibuprofen, a headache remedy, contains 75.69% C, 8.80% H, and 15.51% O by mass; the molar mass is about 206 g.

 - b. Benzene contains only carbon and hydrogen and is 7.74% hydrogen by mass. The molar mass of benzene is 78.1 g/mol.

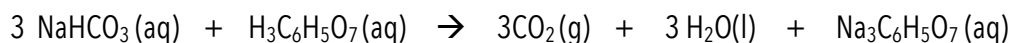
4. Hydrogen gas and bromine gas react to form hydrogen bromide gas.
- Write a balanced chemical equation for this reaction.
 - 3.2 g of hydrogen gas and 9.5 g of bromine gas react. Which is the limiting reagent?
 - How many grams of hydrogen bromide gas can be produced using the amounts in (b)?
 - How many grams of the excess reactant is left unreacted?
 - What volume of HBr, measured at STP, is produced in (b)?
5. When ammonia gas, oxygen gas and methane gas (CH_4) are combined, the products are hydrogen cyanide gas and water.
- Write a balanced chemical equation for this reaction.
 - Calculate the mass of each product produced when 225 g of oxygen gas is reacted with an excess of the other two reactants.
 - If the actual yield of the experiment in (b) is 105 g of HCN, calculate the percent yield.
6. When solutions of potassium iodide and lead (II) nitrate are combined, the products are potassium nitrate and lead (II) iodide.
- Write a balanced equation for this reaction, including (aq) and (s).
 - Calculate the mass of precipitate produced when 50.0mL of 0.45M potassium iodide solution and 75mL of 0.55M lead (II) nitrate solution are mixed.
 - Calculate the volume of 0.50M potassium iodide required to react completely with 50.0mL of 0.50M lead (II) nitrate.

Worksheet #8: Limiting Reactants & Theoretical Yield

Directions: For each problem below, show your work. Always use units and be sure to box your final answer.

1. A manufacturer of bicycles has 50 wheels, 30 frames, and 24 seats.
 - a. How many bicycles can be manufactured using these parts?
 - b. How many parts of each kind are left over?
 - c. Which part is like a limiting reactant in that it limits the production of bicycles?

2. The fizz produced when an Alka-Seltzer tablet is dissolved in water is due to the reaction between sodium bicarbonate, NaHCO_3 , and citric acid, $\text{H}_3\text{C}_6\text{H}_5\text{O}_7$:



In a certain experiment 1.00 g of sodium bicarbonate and 1.00 g of citric acid are allowed to react.

- a. Which reactant is the limiting reactant? *You must show work to support your answer.*
- b. How many grams of carbon dioxide form?
- c. How much of the limiting reactant is left when the reaction is complete?
- d. How much of the excess reactant remains after the reaction is complete?

3. When hydrogen sulfide gas is bubbled into a solution of sodium hydroxide, the reaction forms sodium sulfide and water. How many grams of sodium sulfide are formed if 2.50 g of hydrogen sulfide is bubbled into a solution containing 1.85 g of sodium hydroxide, assuming that the limiting reagent is completely consumed?
4. Solutions of sulfuric acid and lead (II) acetate react to form solid lead (II) sulfate and a solution of acetic acid. If 10.0 g of sulfuric acid and 10.0 g of lead (II) acetate are mixed, calculate the number of grams of sulfuric acid, lead (II) acetate, lead (II) sulfate, and acetic acid present in the mixture after the reaction is complete.
5. A student reacts benzene, C_6H_6 , with bromine, Br_2 , to prepare bromobenzene, C_6H_5Br , and HBr .
- What is the theoretical yield of bromobenzene in this reaction when 30.0 g of benzene reacts with 65.0 g of bromine?
 - If the actual yield of bromobenzene was 56.7 g, what was the percent yield?

Worksheet #9: Molarity

Molarity is a measure of concentration. It is how many moles of solute you have per liter of solvent.

The equation for molarity is: $Molarity (M) = \frac{\text{moles (mol)}}{\text{liter (L)}}$

1. Find the molarity for a mixture that involves 3 moles of potassium for every 6 liters of solution.
2. Find the molarity for a mixture that involves 3 grams of calcium for every 15 liters of solution.
3. Find the molarity for a mixture that involves 0.5 grams of Sodium for every 100 mL of solution.
4. Given 100mL of a 1M dilute solution of HCl, how many moles of HCl are present?
5. Given 100mL of a 1M dilute solute of HCl, how many grams of HCl are present?
6. What us the molarity of a solution formed from 6.75g on NaCl dissolved in water to make a solution with a total volume of 452 mL?

Worksheet #10: Solubility Rules

Directions: Review solubility rules provided at the beginning of the packet **You must memorize the solubility rules!**

1. Identify each of the following compounds as soluble or insoluble in water.

Na_2CO_3 _____

CoCO_3 _____

$\text{Pb}(\text{NO}_3)_2$ _____

K_2S _____

BaSO_4 _____

$(\text{NH}_4)_2\text{S}$ _____

AgI _____

$\text{Ni}(\text{NO}_3)_2$ _____

KI _____

FeS _____

PbCl_2 _____

CuSO_4 _____

Li_2O _____

$\text{Mn}(\text{C}_2\text{H}_3\text{O}_2)_2$ _____

$\text{Cr}(\text{OH})_3$ _____

AgClO_3 _____

$\text{Sn}(\text{SO}_3)_4$ _____

FeF_2 _____

2. Circle the compounds from the list below which are insoluble in water.

HCl

NH_3

NaClO_3

BaSO_4

AgNO_3

PbCl_2

Cu_2O

CuSO_4

$\text{Pb}(\text{C}_2\text{H}_3\text{O}_2)$

AgBr

Why did you sign up for AP Chemistry?

What is your career goal?